









Name.....

It makes a difference - Bonds to 7-Silver level

Score:

Date.....

/30

$\begin{array}{r} 7 \\ - 4 \\ \hline \\ \hline \end{array}$	<table border="1" style="width: 100%; text-align: center;"> <tr><td colspan="2"> </td></tr> <tr><td>1</td><td>5</td></tr> </table>			1	5	$\begin{array}{r} 7 \\ - 2 \\ \hline \\ \hline \end{array}$	$\begin{array}{c} 7 \\ / \quad \backslash \\ 3 \quad \square \end{array}$	$\begin{array}{r} 2 \\ - 4 \\ \hline \\ \hline \end{array}$														
1	5																					
<table border="1" style="width: 100%; text-align: center;"> <tr><td colspan="2">6</td></tr> <tr><td>3</td><td> </td></tr> </table>	6		3		$\begin{array}{r} 6 \\ - 1 \\ \hline \\ \hline \end{array}$	$7 - 3 = \square$	$\begin{array}{r} 6 \\ - 2 \\ \hline \\ \hline \end{array}$	$7 - 2 =$ $7 - \quad = 5$	<table border="1" style="width: 100%; text-align: center;"> <tr><td>6</td></tr> <tr><td> </td><td> </td></tr> </table>	6												
6																						
3																						
6																						
$2 \xrightarrow{+5} (\quad)$	$6 - \square = 2$	$\begin{array}{r} 7 \\ - 4 \\ \hline \\ \hline \end{array}$	$\square \xrightarrow{+1} 7$	<table border="1" style="width: 100%; text-align: center;"> <tr><td> </td></tr> <tr><td>6</td></tr> <tr><td> </td><td>4</td></tr> </table>		6		4	$3 \xrightarrow{+3} (\quad)$													
6																						
	4																					
<table border="1" style="width: 100%; text-align: center;"> <tr><td colspan="3">6</td></tr> <tr><td> </td><td>2</td><td> </td></tr> </table>	6				2		<div style="text-align: center;">  How many less  than  ? <input style="width: 50px;" type="text"/> </div>	$5 = 7 - \square$	$7 - 3 =$ $\quad - 4 = 3$	<table border="1" style="width: 100%; text-align: center;"> <tr><td colspan="2">+5</td></tr> <tr><td>2</td><td> </td></tr> <tr><td colspan="2">-5</td></tr> </table>	+5		2		-5		$4 = \square - 2$					
6																						
	2																					
+5																						
2																						
-5																						
$7 - \square = 3$	<table border="1" style="width: 100%; text-align: center;"> <tr><td> </td></tr> <tr><td>0</td><td>6</td></tr> </table>		0	6		<table border="1" style="width: 100%; text-align: center;"> <tr><td colspan="3">7</td></tr> <tr><td>3</td><td> </td><td>1</td></tr> </table>	7			3		1	<div style="text-align: center;">  How many less  than  ? <input style="width: 50px;" type="text"/> </div>	<table border="1" style="width: 100%; text-align: center;"> <tr><td colspan="2">+4</td></tr> <tr><td>2</td><td>()</td></tr> <tr><td colspan="2"> </td></tr> <tr><td>()</td><td>()</td></tr> </table>	+4		2	()			()	()
0	6																					
7																						
3		1																				
+4																						
2	()																					
()	()																					