



Cuiken Primary Home Learning Grid - P7



Literacy

1. Spelling - Each spelling group should use the words below and SACAWAC x3, write a sentence for each word using the correct punctuation and underline the rule in each word. Try to use cursive handwriting.

Book 3 - Unit 2 - Adding im- to root words beginning with m or p.

immoral immature impatient impolite imperfect
impossible infrequent unhappy invisible

Book 3 - This week we are going to see if you have covered the gaps since our last RWI test. Use these words to practice as stated above and ask someone at home to test you on all 12. If you get 9/12 you will have passed the test for Book 3, part 1. Can you share your scored with us on the classroom?

Sledge hurried wiser valley ridiculous
tickling shiny peaceful enjoyment February
dangerous responsible

Book 4 - END OF BOOK TEST

On Google classroom you will find the childs paper and the teacher paper for the end of year test. Can you ask an adult or older sibling to test you on what you have learnt so far and share your results with me?

Book 6 - Unit 3 - suffixes (3)

Achievement amazement careless deceitful
flavourful government judgement lateness

2. Read Chapter 11 and 12 of Goodnight Mr Tom.

Numeracy

ALL GROUPS - Decimals

This was a gap in our MUMP tests. We have looked at changing fractions and tenths to decimals. We do this by partitioning the number into the whole and the tenth.

EG -

$2 \frac{2}{10} = 2.2$ (There are 2 wholes and 2 parts of a whole)

$\frac{2}{10} = 0.2$ (There are no wholes and 2 parts of a whole)

Remember that 10 tenths make a whole! Use this number line to help you!

0.1 0.2 0.3 0.4 0.5 0.6 0.7 0.8 0.9 1.0

Complete the sheet attached to the bottom of the grid. You can print it or copy into your jotter. Please remember to show the fraction and the decimal.

Can you also complete this table?

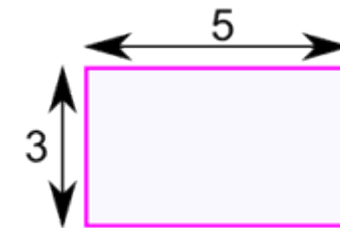
Percentage	Decimal	Fraction
25%	0.25	
		50/100
	0.75	

2. Create 10 questions to practice your maths knowledge across the board. Get a grown up or sibling to test you at home!

Maths

1. Finding the area of simple shapes -

Example: What is the area of this rectangle?



The formula is:

$$\begin{aligned} \text{Area} &= w \times h \\ w &= \text{width} \\ h &= \text{height} \end{aligned}$$

The width is 5, and the height is 3, so we know $w = 5$ and $h = 3$:

$$\text{Area} = 5 \times 3 = 15$$

Complete the Sheet attached to the bottom of the grid! Give this a try using the strategy above. Lay it out like so -

$$\begin{aligned} \text{Area} &= w \times h \\ A &= 5 \times 3 \\ A &= 15\text{cm}^2 \end{aligned}$$



Cuiken Primary Home Learning Grid - P7



<p>Answer</p> <ol style="list-style-type: none">1) What did Tom say Mrs Beech's letter was about?2) Why was Tom not eager for William to return to his Mother?3) How do you think William felt when his friends were admiring his drawings? And why?4) What religion is Zach and how do the children discover this?5) Do you think Willie likes living with Tom? Why?6) What play were the children going to perform?7) How did Willie manage to learn all of the lines of the play?8) How did Willie discover he was a good actor?9) What part did Miss Thorne give William to play? What did the other children think about this?10) Who was Rachel?11) How do you think Tom felt when he knew William was going to star in the play? <p>Try to make the effort to read the rest of <i>Goodnight Mr Tom</i> before Summer Holidays and can you log onto AR and take the quiz?</p> <p>3 Writing - Shape poetry. Type Shape Poetry into Google and have a look at the examples given. I am looking for you to write a poem about a place that you have spent lots of time over the last 12 weeks. This may be your home, the garden, somewhere you go to walk regularly. Can you describe it to me, why is it important? How does it make you feel? Shape poems do not need to be too</p>		
--	--	--



Cuiken Primary Home Learning Grid - P7



long, but need to have a story to them. If you can upload this onto Google Classroom so I can see! You may want to start by writing the poem in your jotter, then outline the shape of the object or place and then copy the poem. Please don't be shy in sharing your work!

Mrs Mason's Tasks -

Listening and Talking task - watch Newsround this week. Take one of the topics they talk about and have a discussion with a family member about what you have learned. (it might be mum or dad, or a relative on the phone J)

2. **Reading task** - Read from Chapter 28. Go as far as you can, you can even finish the book. I will be asking questions about it in the next weeks but finish it if you can and do the AR test to check your understanding.

The questions this week are on chapters 29-39.

Answer 4 of the following:

What happens to make Zero run away?

Why does Stanley go after Zero?

How has Zero changed since the beginning of the story?

What has changed in Stanley since he first came to the camp?

What do the boys find which helps them?

Challenge - can you answer all the questions?

Spelling Each spelling group should use the words below and do SACAWAC then write a sentence for each word using the correct punctuation. Remember to use cursive handwriting. All spelling words are underlined.

infectious, nutritious, cautious, ambitious, fictitious, superstitious. We can also add an extra suffix



Cuiken Primary Home Learning Grid - P7



<p>to make a new adverb - <u>infectiously, nutritiously, cautiously, ambitiously, superstitiously</u> Tigers - The <i>c</i> sound spelt <i>que</i> and the <i>g</i> sound spelt <i>-gue</i> <u>unique, antique, grotesque, cheque, picturesque, fatigue, league, dialogue, catalogue, tongue</u> Lions- words with <i>er</i> in them <u>mother, brother, letter, sister, summer, father, baker, worker, winter, flower</u></p>		
<p style="text-align: center;">Expressive Art</p> <p>Art - Banksy's newest artwork supports Black Lives Matter.</p> <p><u>Graffiti artist Banksy</u> has shown his support for the Black Lives Matter movement with his latest artwork.</p> <p>The anonymous artist, who is known for creations that highlight <u>important issues and events going on in the world</u>, shared the piece of art on his Instagram page.</p> <p>Banksy's most recent painting shows an American flag being burned by a candle. It also includes a picture of a person who is thought to represent <u>George Floyd, a black man who died in police custody</u>.</p> <p>The artist also shared some thoughts on the racial inequality people all across the world have been challenging at this time. He said:"At first I thought I should just shut up and listen to black people about the issue. But why would I do that? It's not their problem. It's mine."</p> <p>He went on to say that people of colour had been "failed by the system". "This faulty system is making their lives a misery, but it's not their job to fix it," he added.</p>	<p style="text-align: center;">HWB / Exercise</p> <p>HWB</p> <p>We are not born artists, musicians, athletes or scientists.</p> <p>We learn to do these things through hard work and effort. But remember - the way we think feel or learn things shapes our brain.</p> <p>How did you get on with your own amazing brain in the crossing your arms challenge?</p> <p>Mistakes are proof that you are trying, but it is hard if you always doubt your own capabilities.</p> <p>What could you say to yourself instead of these to make them more Growth Mindset?</p> <p>This is too hard.</p> <p>Mine isn't good enough.</p> <p>This is good enough.</p> <p>I'll never be able to do this.</p> <p>Choose one of your Growth Mindset phrases above and design a Doodle Art quote poster.</p> <p>You can design one of your own or look at this</p>	<p style="text-align: center;">Continue with S1 Transition</p> <p>All relevant documents on Google classroom</p> <p>Continue to work through these tasks!</p>



Cuiken Primary Home Learning Grid - P7



Banksy isn't the only person in the public eye to speak out on racism. Lots of black celebrities have shared stories of their own experiences, and called for much-needed change. Black Lives Matter protests have also been held in a number of cities in the UK, with thousands of people attending. Visit the following newsround website for to learn more about Banksy and to view his newest artwork in more detail: <https://www.bbc.co.uk/newsround/52955451>
Task: Design your own artwork, displaying how important the Black Lives Matters movement is. Use Banksy's as inspiration, but please do not just copy it.

Think about a film or episode of something you have watched recently. Can you choose a scene or favourite part that you can create a freeze frame to? Remember to include body language and facial expressions - can you get someone to guess what it is?

website for ideas:
www.doodle-art-alley.com/quote-coloring-pages

Cuiken Olympics with Lauren!

Hi everyone, thank you so much again for everyone's efforts during last week's obstacle course week, I am so impressed with everyone who took part and to our winners! This week is week 3 of Cuiken's Olympics and it is called 'Fitness 5'. You are going to have 5 exercises to complete, 5 times, for 5 days.

Your activities are:

- 5 sit ups
- 5 squat jumps
- 5 press ups, either full or on your knees
- 5 lunges
- 5 burpees

I will post a video on twitter going through all of these exercises so don't worry if you aren't sure. I'd love to see all your pictures and videos on twitter and I will be looking for the best technique to win this weeks 50 recognition squares! If you're tweeting this week I'd love if you could use #Fitness5 and #Cuikensolympics! Good luck, Lauren 😊



Cuiken Primary Home Learning Grid - P7



Family Learning	French	ICT or Technologies / RME
<ol style="list-style-type: none">1. Have a discussion with someone at home around your strengths and weaknesses.2. Some of the baking I have seen on twitter has made me so jealous! Think of something you wouldn't normally bake or cook and can you challenge yourself to try something new! Please post on twitter and let me see how well you get on!	<p>This week, we are learning how to recognise and sort masculine, feminine and plural words. Have a look at the Google slides PowerPoint first and then have a go at the sorting worksheet. As I mention in the slideshow, there are exceptions to the rules, but I have not included any on the worksheet! Bonne chance!</p> <p>https://docs.google.com/presentation/d/1skEaCQoJjqKaLLVzFJkAEMWuluOxs_JOUklkC9EUiOE/edit#slide=id.g888c4c1ac6_0_0</p> <p>French Live Lesson -</p> <ul style="list-style-type: none">• Follow the link below to access a free French lesson. Tune in every Thursday at 11.30am to see Ann Robertson (Midlothian and East Lothian's 1+2 Language Coordinator) giving a lesson. <p>Live stream lesson - virtual trip to France! (June 4th, 11.30 am)</p> <p>https://youtu.be/pt8PFKzORDY</p>	<p>ICT - Can you find 3 facts online about Black Lives Matter? Present these in your jotters or on a poster and share with us on twitter.</p> <p>RME (the answers to the following questions are your own thoughts, there are no right or wrong answers) You could talk these through with an adult if you wanted to.</p> <p>You may have seen the protests in America and beyond for George Floyd, you may also have noticed the banners with 'Black Lives Matter' that people are holding up, displaying or writing on roads. What do you think Black Lives Matter means?</p> <p>Even though there is unfairness in the world, there have always been people working to change it and you can be a part of that. In what way do you think you could make a change in the world?</p> <p>Prejudice is the judgement of someone or something without knowing enough information about that person or thing. It is an attitude or belief.</p> <p>Discrimination is treating someone differently because of their race, gender or sexuality. It is an action or behaviour.</p> <p>Which do you think was displayed in the case of George Floyd? Please explain your reasoning behind your answer.</p> <p>Example of prejudice: An elderly woman thinks that all young people are lazy and don't want to do anything but stay on their screens and don't want to get a good education. She lives in a retirement home.</p> <p>What would you say to this elderly lady to convince her</p>



Cuiken Primary Home Learning Grid - P7



		<p>this is not true.</p> <p>Example of discrimination:</p> <p>During a PE lesson, a boy who is overweight is picked last for the school football team. This boy is actually very good at sports.</p> <p>What would you say to convince people that they should not judge others by their appearance?</p> <p>Donald Trump called the protesters 'terrorists' Do you agree/not agree with him? Please explain your answer</p> <p>Do you think politicians have the right to say anything they like? If not why not? If you agree with that - why do you agree with it?</p>
--	--	--



Cuiken Primary Home Learning Grid - P7



What is the Decimal Number?

1:	2	2:	$2 \frac{6}{10}$	3:	$2 \frac{8}{10}$	4:	$1 \frac{2}{10}$
5:	$2 \frac{4}{10}$	6:	$3 \frac{3}{10}$	7:	$3 \frac{9}{10}$	8:	$2 \frac{3}{10}$
9:	$2 \frac{9}{10}$	10:	$3 \frac{7}{10}$	11:	$3 \frac{1}{10}$	12:	$2 \frac{7}{10}$
13:	$3 \frac{4}{10}$	14:	$3 \frac{2}{10}$	15:	$1 \frac{9}{10}$	16:	$2 \frac{5}{10}$
17:	$1 \frac{7}{10}$	18:	$3 \frac{6}{10}$	19:	$1 \frac{6}{10}$	20:	$3 \frac{8}{10}$

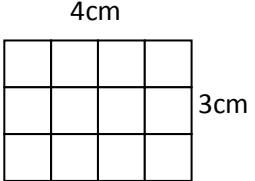


Cuiken Primary Home Learning Grid - P7



Area: the amount of space inside a shape

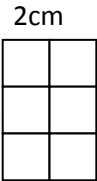
Example:



4cm x 3cm = 12cm²

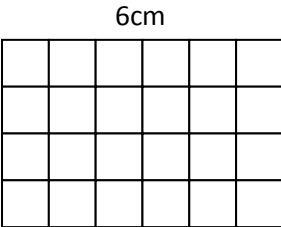
1. Find the area of the following rectangles:

a)



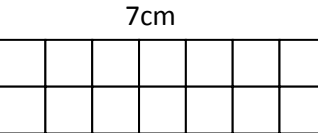
2cm
3cm

b)



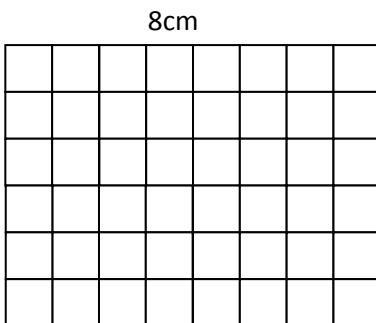
6cm
4cm

c)



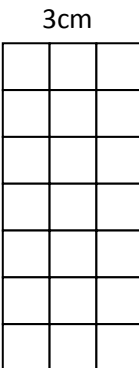
7cm
2cm

d)



8cm
6cm

e)



3cm
7cm



Cuiken Primary Home Learning Grid - P7



2. Find the perimeter and area of the following rectangles:

